

Varied Fluency

Step 13: Subtract with 2-Digits 1

National Curriculum Objectives:

Mathematics Year 2: (2C2b) [Add and subtract numbers using concrete objects and pictorial representations, including: two two-digit numbers](#)

Mathematics Year 2:(2C4) [Solve problems with addition and subtraction using concrete objects and pictorial representations, including those involving numbers, quantities and measures applying their increasing knowledge of mental and written methods](#)

Differentiation:

Developing Questions to support subtracting a 2-digit number from a 2-digit number. No exchanges; each question includes Base 10 within a place value chart.

Expected Questions to support subtracting a 2-digit number from a 2-digit number. No exchanges; place value counters, place value charts, numerals and some use of column method.

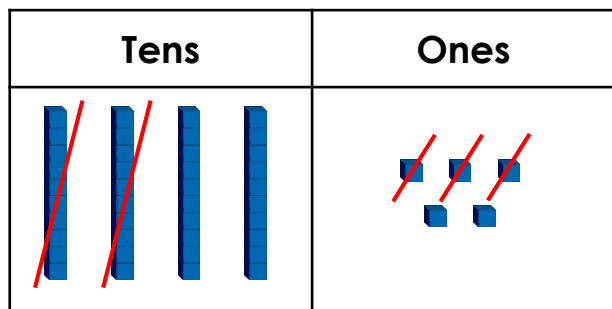
Greater Depth Questions to support subtracting a 2-digit number from a 2-digit number. No exchanges; includes bar models, part-whole models and questions presented in a linear format.

More [Year 2 Addition and Subtraction](#) resources.

Did you like this resource? Don't forget to [review](#) it on our website.

Subtract with 2-Digits 1

1a. Write a calculation to match the chart below and complete the answer.



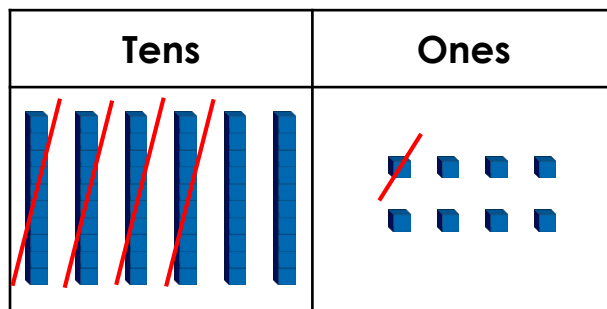
$$\square - \square = \square$$



VF

Subtract with 2-Digits 1

1b. Write a calculation to match the chart below and complete the answer.




$$\square - \square = \square$$



VF

2a. True or false?

$$59 - 26 = 23$$



VF

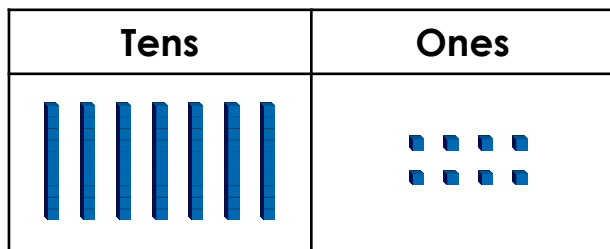
2b. True or false?

$$23 - 12 = 11$$



VF

3a. Circle the correct answer.



subtract 15

53

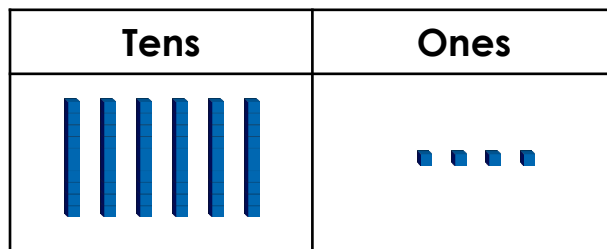
64

63



VF

3b. Circle the correct answer.



subtract 31

32

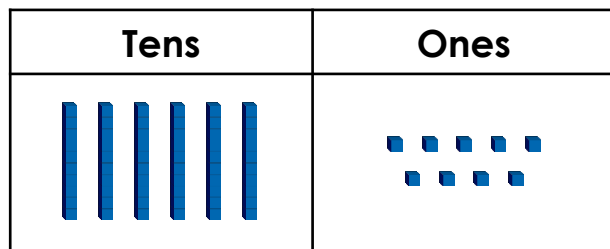
33

43




VF

4a. Use Base 10 to work out $69 - 25$.



VF

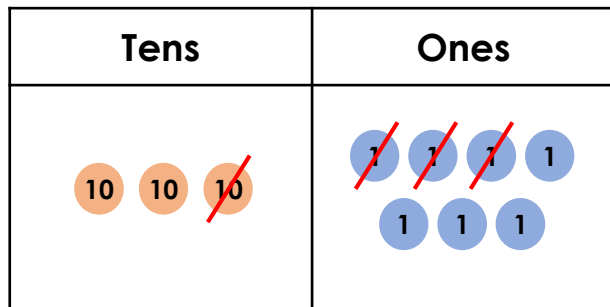
4b. Use Base 10 to work out $97 - 52$.



VF

Subtract with 2-Digits 1

5a. Write a calculation to match the chart below and complete the answer.



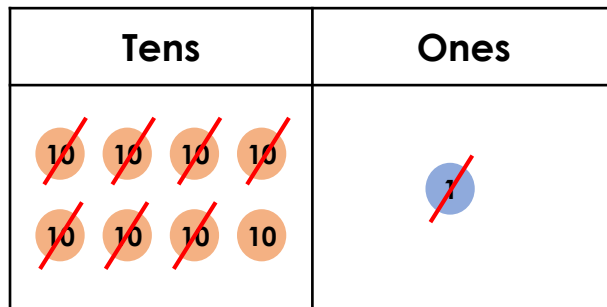
$$\square - \square = \square$$



VF

Subtract with 2-Digits 1

5b. Write a calculation to match the chart below and complete the answer.

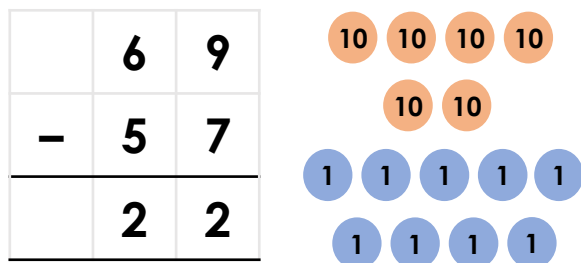


$$\square - \square = \square$$



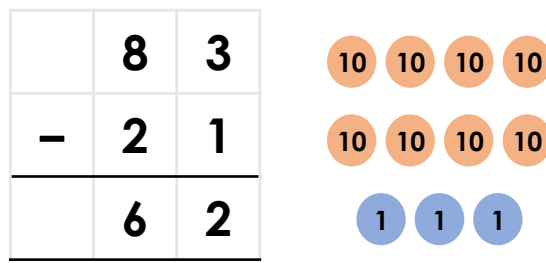
VF

6a. True or false?



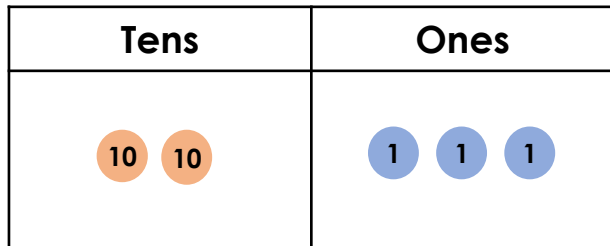
VF

6b. True or false?



VF

7a. Circle the correct answer.



subtract 12

13

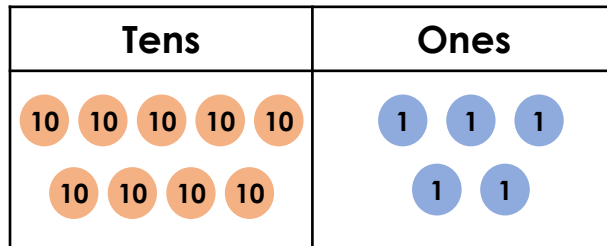
12

11



VF

7b. Circle the correct answer.



subtract 63

33

32

23



VF

8a. Work out the calculation below.



VF

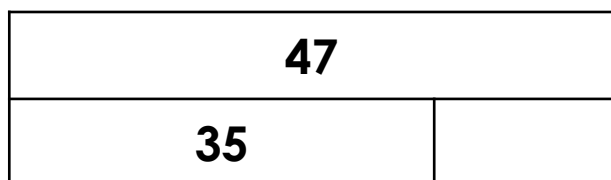
8b. Work out the calculation below.



VF

Subtract with 2-Digits 1

9a. Write a calculation to match the bar model below and complete the answer.

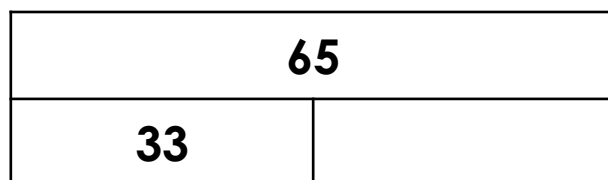


$$\square - \square = \square$$

VF

Subtract with 2-Digits 1

9b. Write a calculation to match the chart below and complete the answer.



$$\square - \square = \square$$

VF

10a. True or false?

$$73 - 41 = 32$$



VF

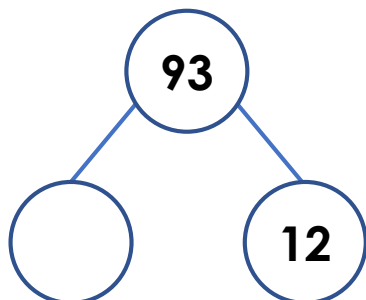
10b. True or false?

$$39 - 24 = 14$$



VF

11a. Circle the correct answer.



72

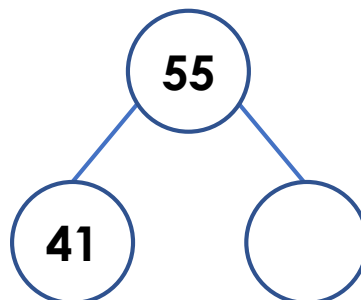
81

71



VF

11b. Circle the correct answer.



14

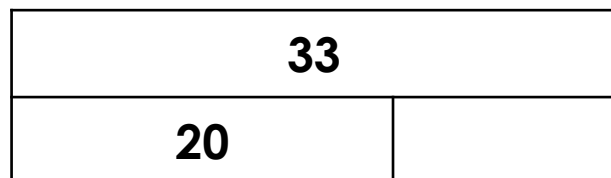
16

13



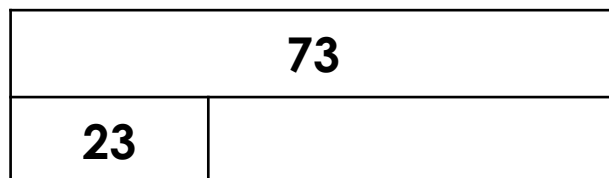
VF

12a. Work out the calculation below.



VF

12b. Work out the calculation below.



VF

Varied Fluency
Subtract with 2-Digits 1

Developing

1a. $45 - 23 = 22$

2a. False; $59 - 26 = 33$

3a. 63

4a. 44; 2 tens and 5 ones should be crossed out on the chart.

Expected

5a. $37 - 13 = 24$

6a. False; $69 - 57 = 12$

7a. 11

8a.

	7	8
-	2	5
	5	3

Greater Depth

9a. $47 - 35 = 12$

10a. True

11a. 81

12a. 13

Varied Fluency
Subtract with 2-Digits 1

Developing

1b. $68 - 41 = 27$

2b. True

3b. 33

4b. 45; 5 tens and 2 ones should be crossed out on the chart.

Expected

5b. $81 - 71 = 10$

6b. True

7b. 32

8b.

	6	2
-	3	2
	3	0

Greater Depth

9b. $65 - 33 = 32$

10b. False; $39 - 24 = 15$

11b. 14

12b. 50